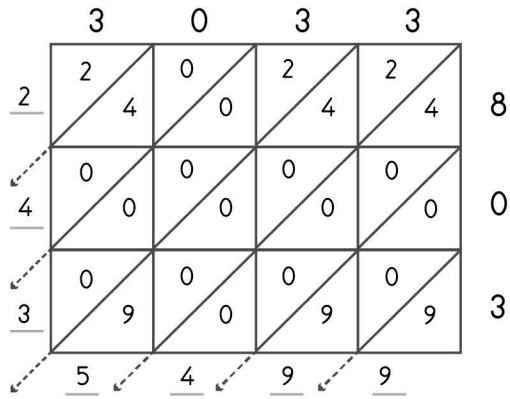


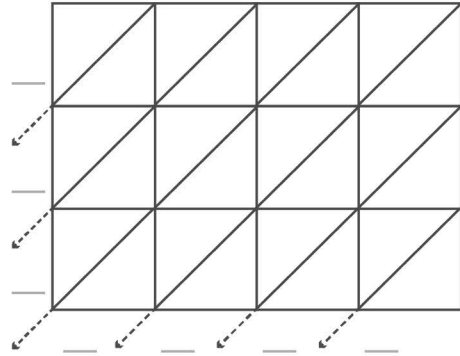


-digit multiplication : Lattice method


Work out the answers to these multiplication questions using the lattice method.



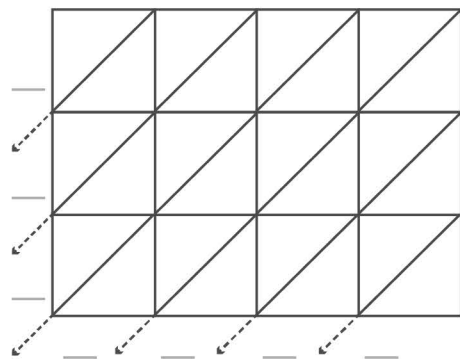
$3033 \times 803 = 2,435,499$



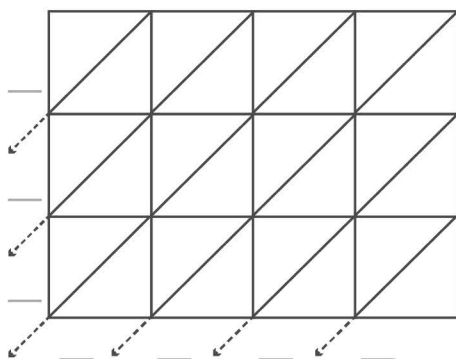
$7500 \times 396 = \underline{\hspace{2cm}}$



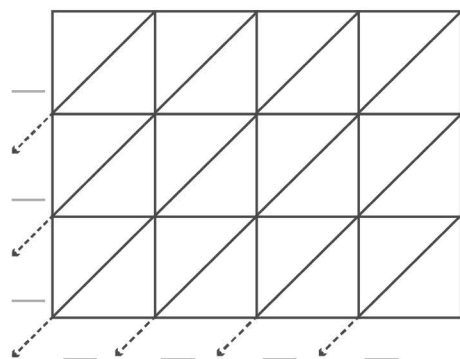
$4507 \times 923 = \underline{\hspace{2cm}}$



$1902 \times 734 = \underline{\hspace{2cm}}$



$9541 \times 213 = \underline{\hspace{2cm}}$



$6907 \times 752 = \underline{\hspace{2cm}}$