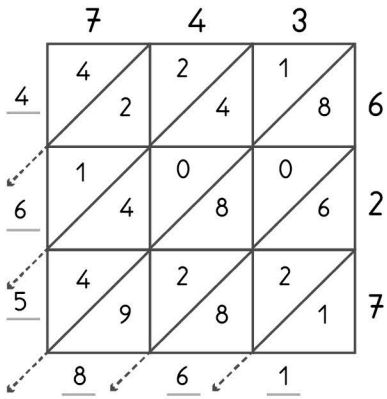


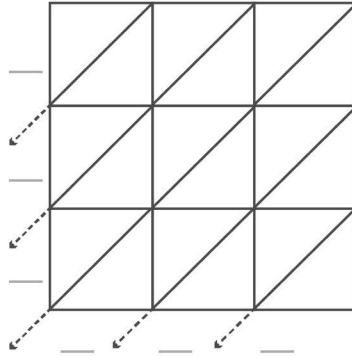
3

-digit multiplication : Lattice method

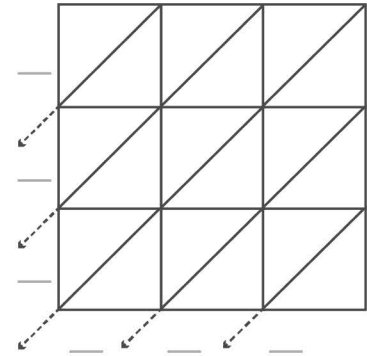
Work out the answers to these multiplication questions using the lattice method.



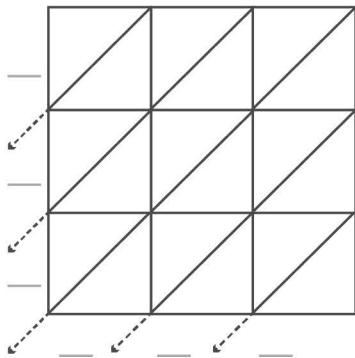
$743 \times 627 = 465,861$



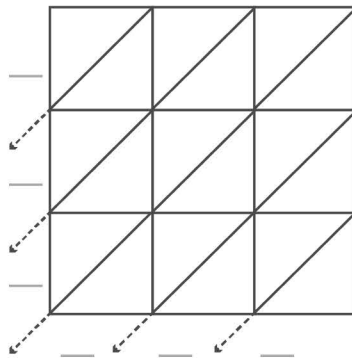
$872 \times 342 = \underline{\hspace{2cm}}$



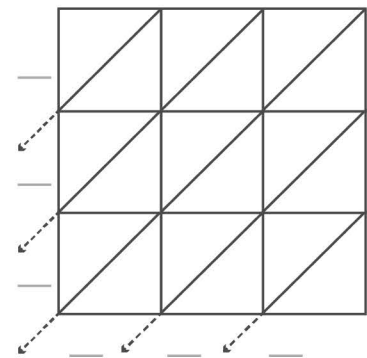
$785 \times 308 = \underline{\hspace{2cm}}$



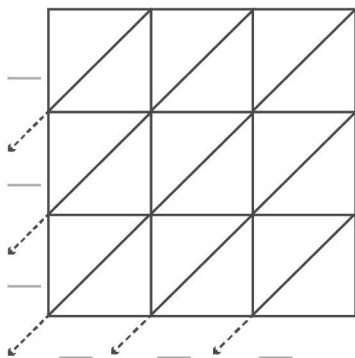
$803 \times 153 = \underline{\hspace{2cm}}$



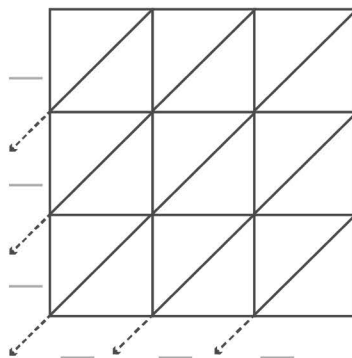
$779 \times 128 = \underline{\hspace{2cm}}$



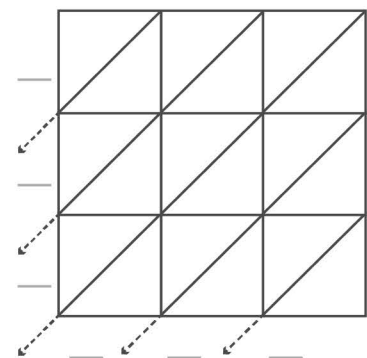
$836 \times 541 = \underline{\hspace{2cm}}$



$798 \times 270 = \underline{\hspace{2cm}}$



$890 \times 752 = \underline{\hspace{2cm}}$



$735 \times 408 = \underline{\hspace{2cm}}$