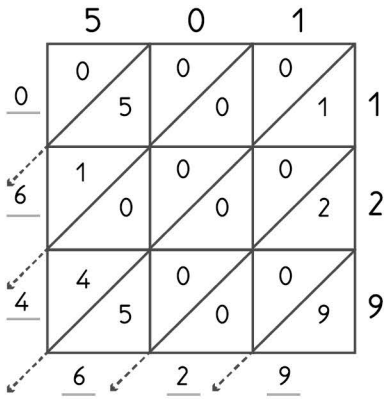


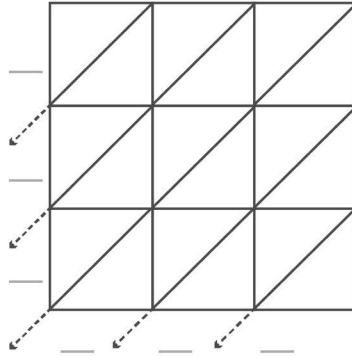
# 3

## -digit multiplication : Lattice method

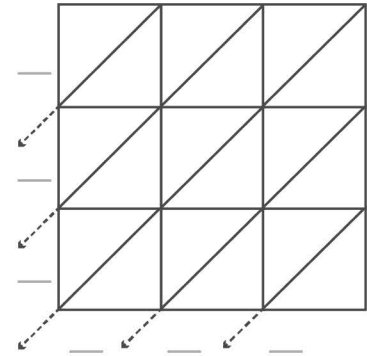
Work out the answers to these multiplication questions using the lattice method.



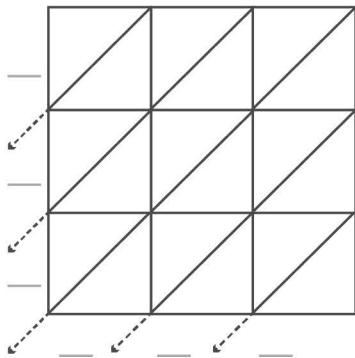
$501 \times 321 = 64,629$



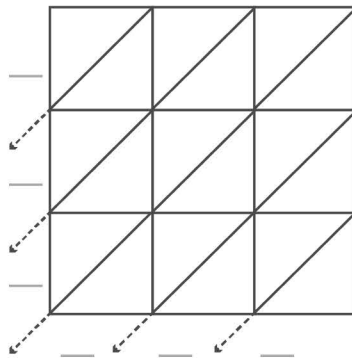
$667 \times 640 = \underline{\hspace{2cm}}$



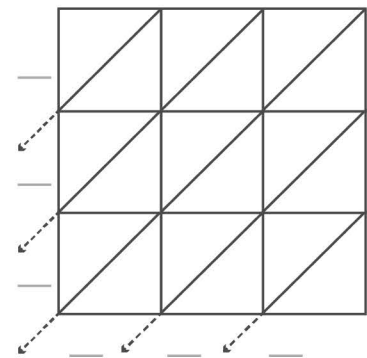
$642 \times 578 = \underline{\hspace{2cm}}$



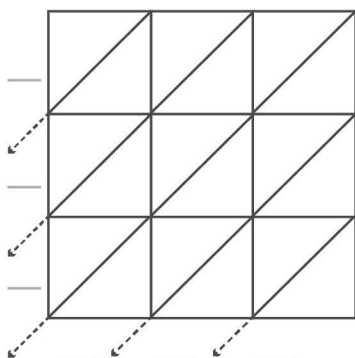
$555 \times 114 = \underline{\hspace{2cm}}$



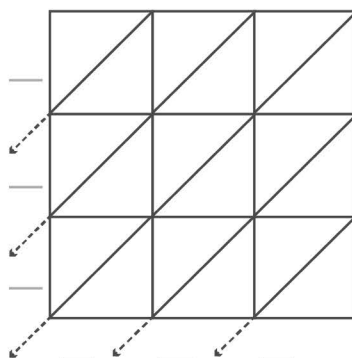
$578 \times 524 = \underline{\hspace{2cm}}$



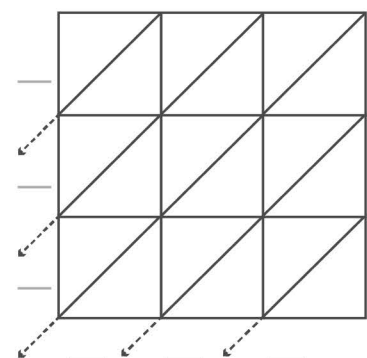
$609 \times 278 = \underline{\hspace{2cm}}$



$533 \times 289 = \underline{\hspace{2cm}}$



$697 \times 320 = \underline{\hspace{2cm}}$



$536 \times 168 = \underline{\hspace{2cm}}$