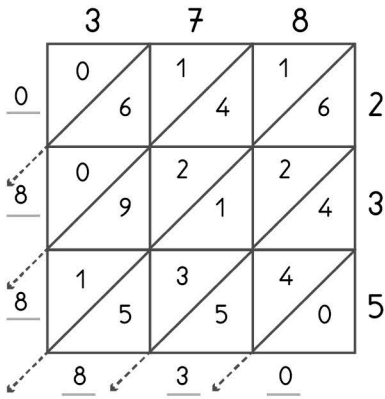


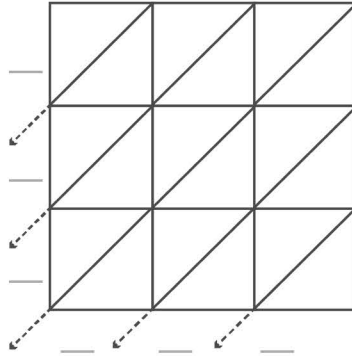
3

-digit multiplication : Lattice method

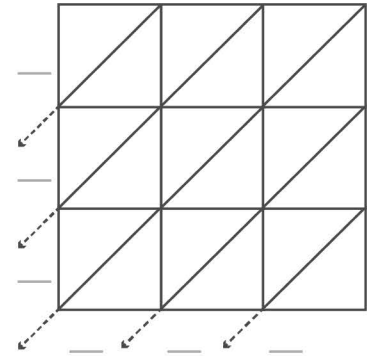
Work out the answers to these multiplication questions using the lattice method.



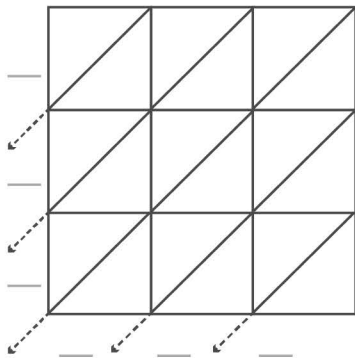
$378 \times 235 = 88,830$



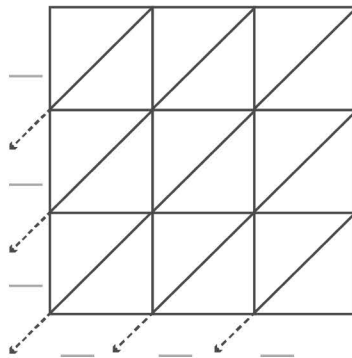
$475 \times 321 = \underline{\hspace{2cm}}$



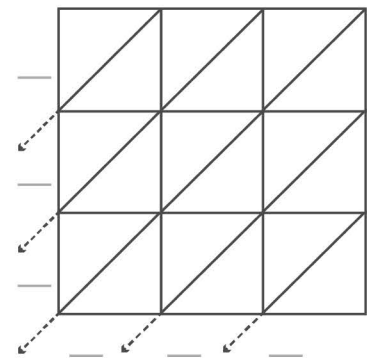
$335 \times 309 = \underline{\hspace{2cm}}$



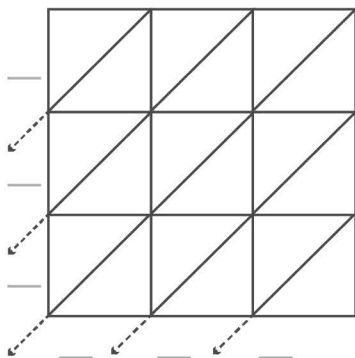
$421 \times 159 = \underline{\hspace{2cm}}$



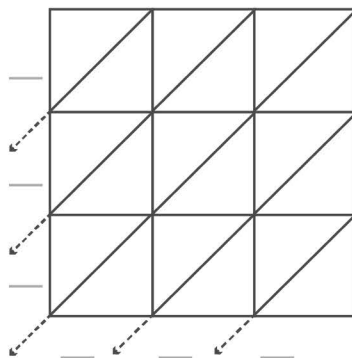
$307 \times 264 = \underline{\hspace{2cm}}$



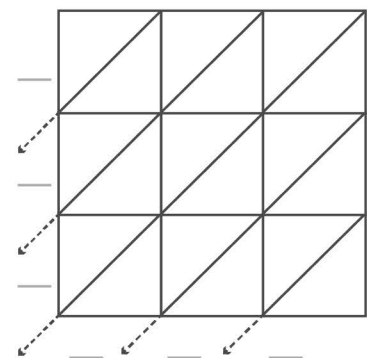
$447 \times 338 = \underline{\hspace{2cm}}$



$355 \times 329 = \underline{\hspace{2cm}}$



$444 \times 372 = \underline{\hspace{2cm}}$



$490 \times 208 = \underline{\hspace{2cm}}$