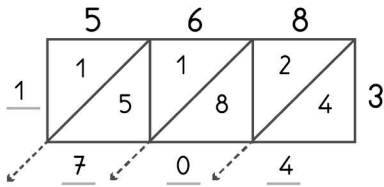


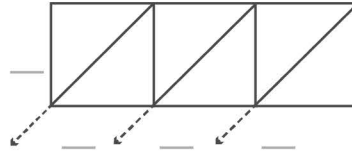
3

-digit multiplication : Lattice method

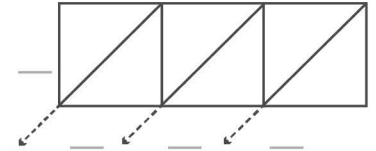
Work out the answers to these multiplication questions using the lattice method.



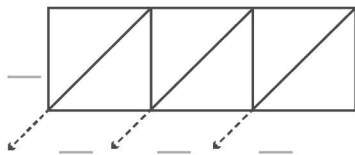
$568 \times 3 = 1704$



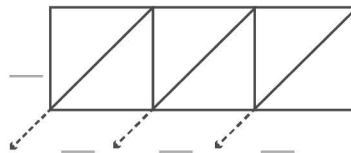
$575 \times 7 = \underline{\quad}$



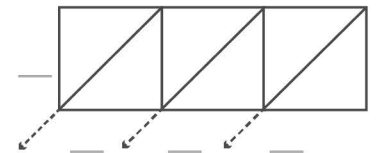
$689 \times 4 = \underline{\quad}$



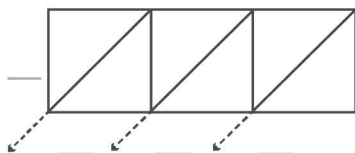
$633 \times 9 = \underline{\quad}$



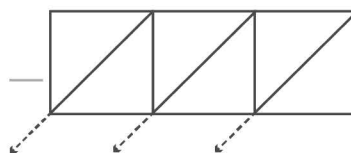
$527 \times 6 = \underline{\quad}$



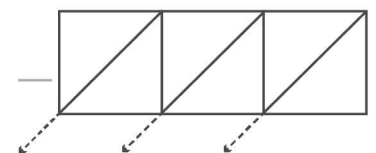
$647 \times 8 = \underline{\quad}$



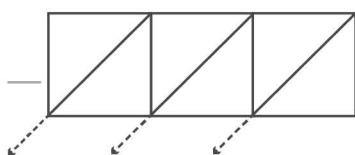
$555 \times 3 = \underline{\quad}$



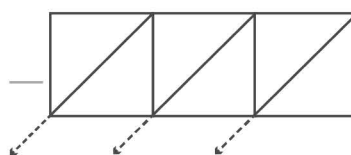
$617 \times 9 = \underline{\quad}$



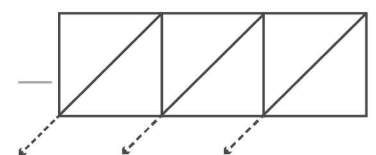
$529 \times 4 = \underline{\quad}$



$667 \times 2 = \underline{\quad}$



$587 \times 7 = \underline{\quad}$



$619 \times 5 = \underline{\quad}$