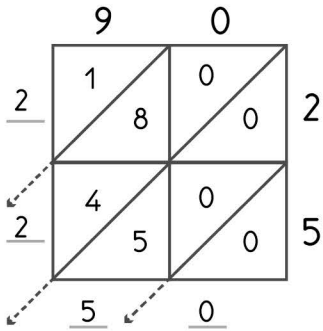


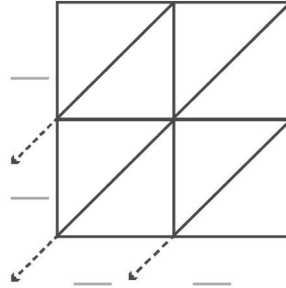
2

-digit multiplication : Lattice method

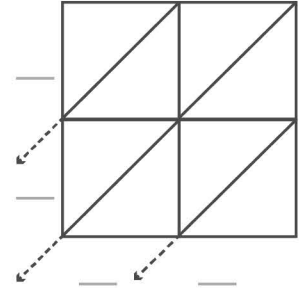
Work out the answers to these multiplication questions using the lattice method.



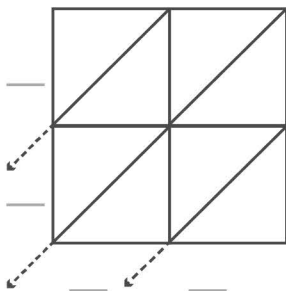
$90 \times 25 = 2250$



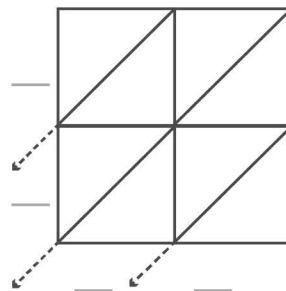
$88 \times 72 = \underline{\quad}$



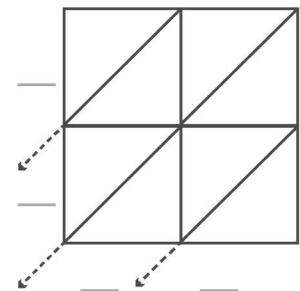
$94 \times 27 = \underline{\quad}$



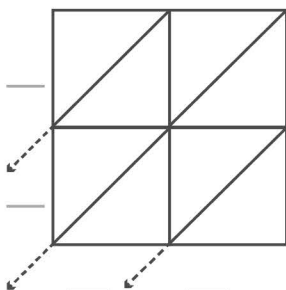
$96 \times 67 = \underline{\quad}$



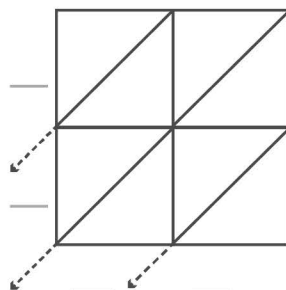
$89 \times 64 = \underline{\quad}$



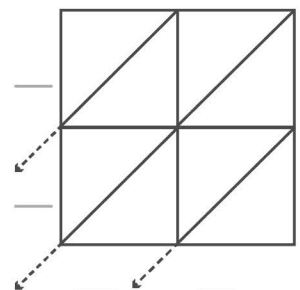
$98 \times 65 = \underline{\quad}$



$84 \times 53 = \underline{\quad}$



$91 \times 70 = \underline{\quad}$



$87 \times 75 = \underline{\quad}$