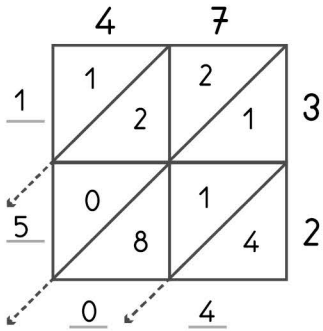


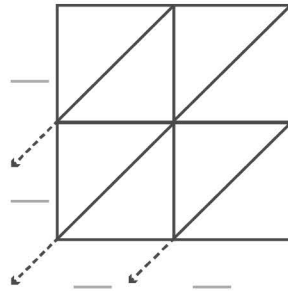


**-digit multiplication : Lattice method**

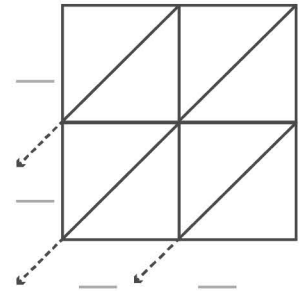
Work out the answers to these multiplication questions using the lattice method.



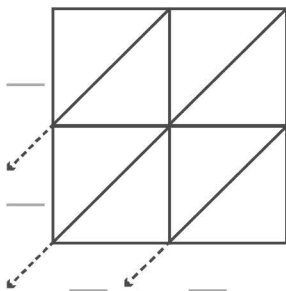
$47 \times 32 = 1504$



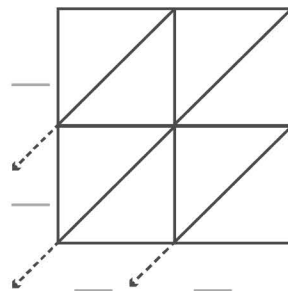
$33 \times 15 = \underline{\quad}$



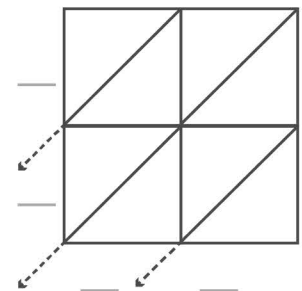
$48 \times 18 = \underline{\quad}$



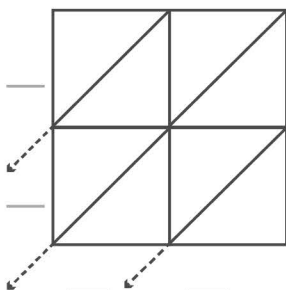
$44 \times 36 = \underline{\quad}$



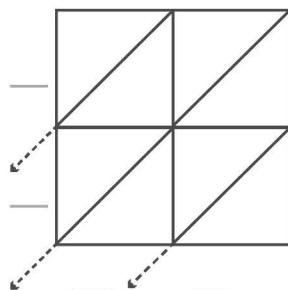
$30 \times 27 = \underline{\quad}$



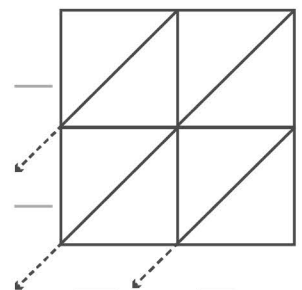
$49 \times 41 = \underline{\quad}$



$37 \times 23 = \underline{\quad}$



$40 \times 35 = \underline{\quad}$



$31 \times 29 = \underline{\quad}$