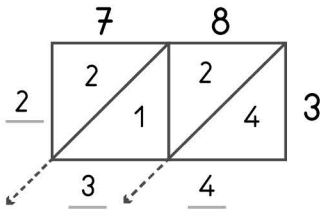


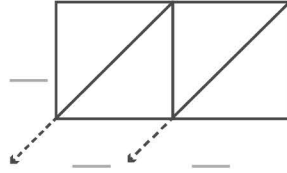


-digit multiplication : Lattice method

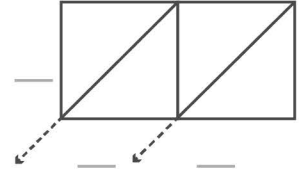
Work out the answers to these multiplication questions using the lattice method.



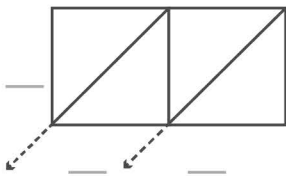
$$78 \times 3 = 234$$



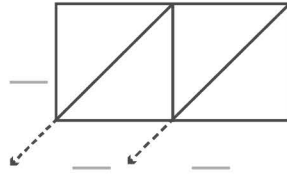
$$85 \times 5 = \underline{\quad}$$



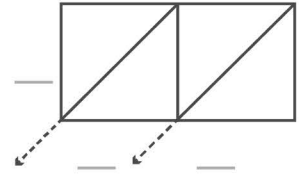
$$72 \times 8 = \underline{\quad}$$



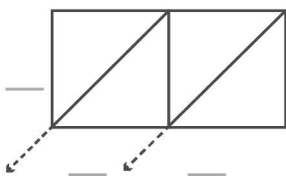
$$87 \times 7 = \underline{\quad}$$



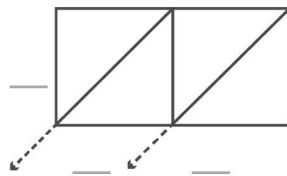
$$79 \times 8 = \underline{\quad}$$



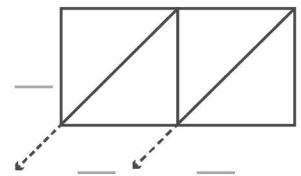
$$75 \times 2 = \underline{\quad}$$



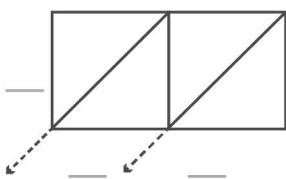
$$77 \times 2 = \underline{\quad}$$



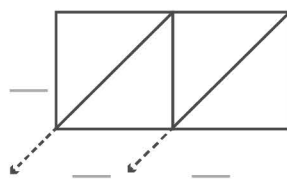
$$83 \times 5 = \underline{\quad}$$



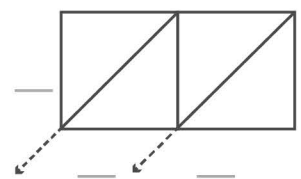
$$74 \times 4 = \underline{\quad}$$



$$89 \times 8 = \underline{\quad}$$



$$76 \times 7 = \underline{\quad}$$



$$88 \times 3 = \underline{\quad}$$