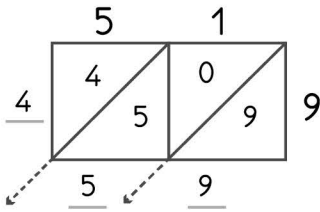


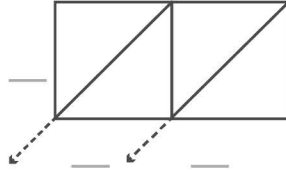


## -digit multiplication : Lattice method

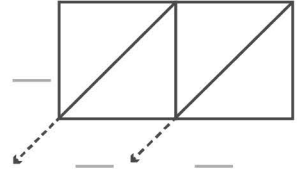
Work out the answers to these multiplication questions using the lattice method.



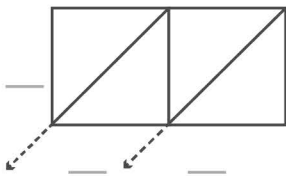
$$51 \times 9 = 459$$



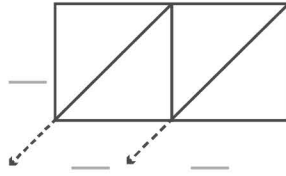
$$60 \times 9 = \underline{\quad}$$



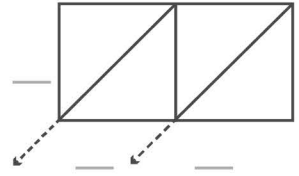
$$57 \times 4 = \underline{\quad}$$



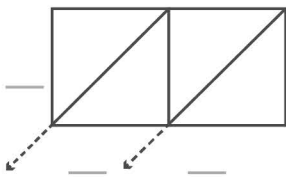
$$36 \times 6 = \underline{\quad}$$



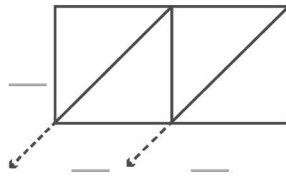
$$53 \times 4 = \underline{\quad}$$



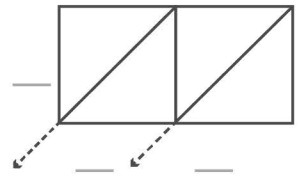
$$68 \times 8 = \underline{\quad}$$



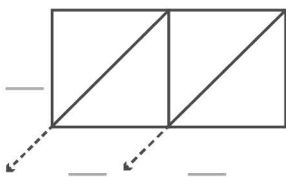
$$55 \times 3 = \underline{\quad}$$



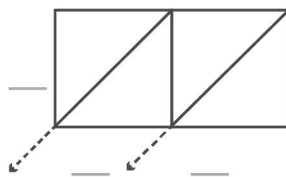
$$60 \times 9 = \underline{\quad}$$



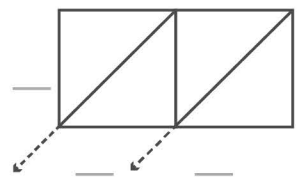
$$57 \times 5 = \underline{\quad}$$



$$61 \times 7 = \underline{\quad}$$



$$50 \times 2 = \underline{\quad}$$



$$66 \times 9 = \underline{\quad}$$