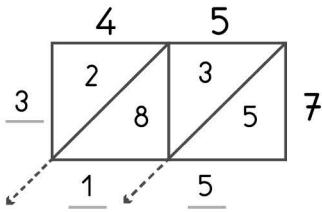


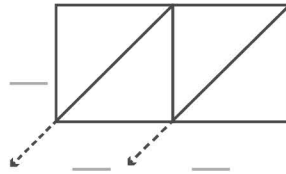


-digit multiplication : Lattice method

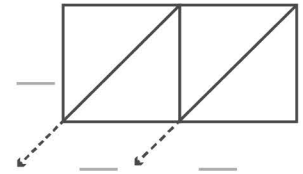
Work out the answers to these multiplication questions using the lattice method.



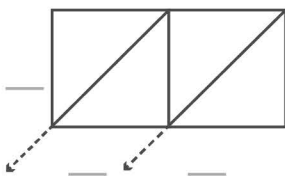
$45 \times 7 = 315$



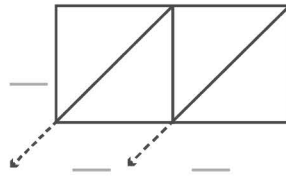
$78 \times 8 = \underline{\quad}$



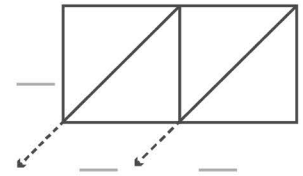
$29 \times 9 = \underline{\quad}$



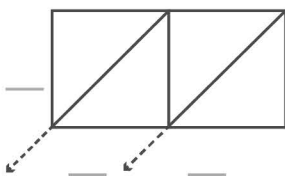
$17 \times 6 = \underline{\quad}$



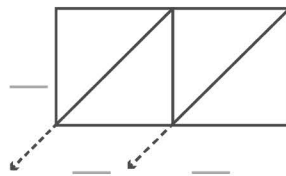
$54 \times 7 = \underline{\quad}$



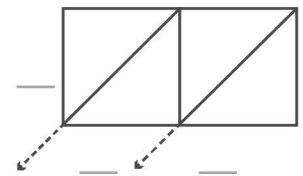
$75 \times 5 = \underline{\quad}$



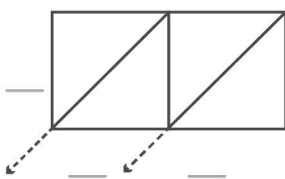
$36 \times 4 = \underline{\quad}$



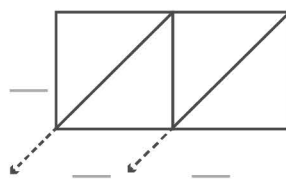
$68 \times 3 = \underline{\quad}$



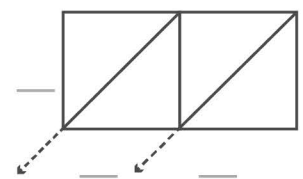
$38 \times 7 = \underline{\quad}$



$95 \times 6 = \underline{\quad}$



$81 \times 9 = \underline{\quad}$



$57 \times 4 = \underline{\quad}$