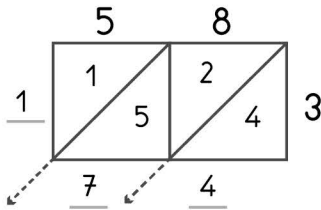


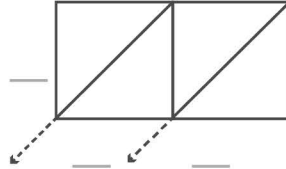
2

-digit multiplication : Lattice method

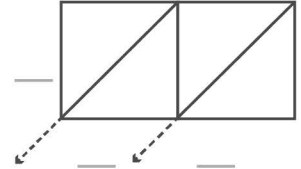
Work out the answers to these multiplication questions using the lattice method.



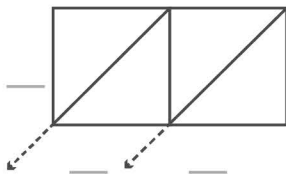
$58 \times 3 = 174$



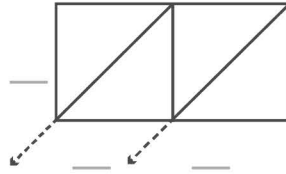
$17 \times 2 = \underline{\quad}$



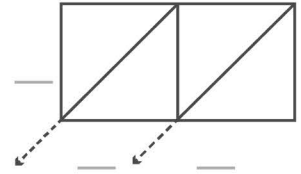
$22 \times 8 = \underline{\quad}$



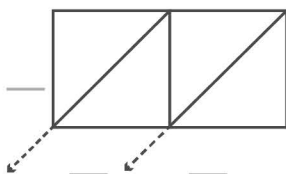
$24 \times 5 = \underline{\quad}$



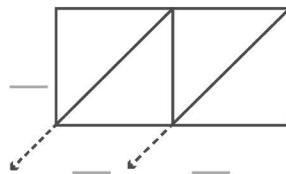
$14 \times 9 = \underline{\quad}$



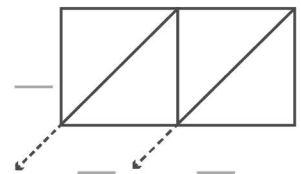
$16 \times 7 = \underline{\quad}$



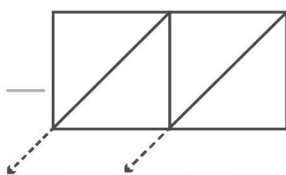
$27 \times 3 = \underline{\quad}$



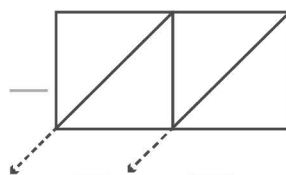
$19 \times 9 = \underline{\quad}$



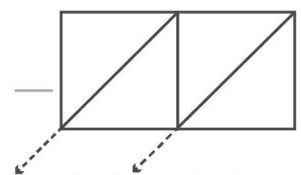
$21 \times 7 = \underline{\quad}$



$20 \times 6 = \underline{\quad}$



$15 \times 5 = \underline{\quad}$



$29 \times 9 = \underline{\quad}$