


## Equal groups - Multiplication sentences


Write multiplication sentence to describe each model.



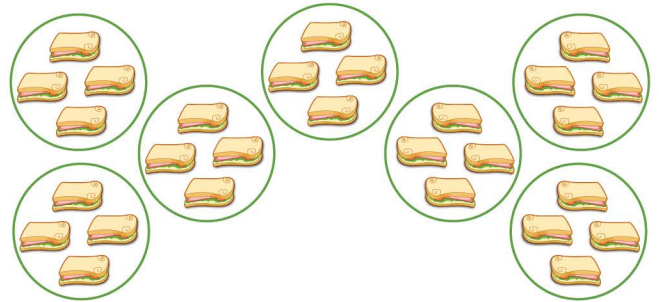
$$\underline{10} \times \underline{2} =$$



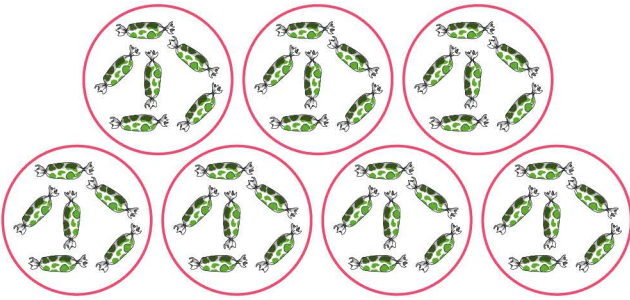
$$\underline{\quad} \times \underline{\quad} =$$



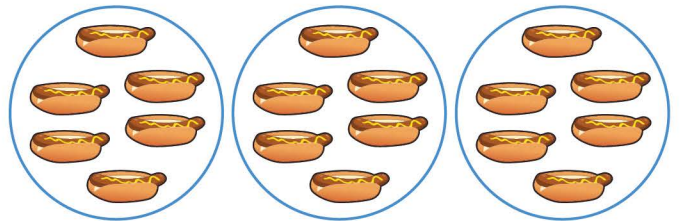
$$\underline{\quad} \times \underline{\quad} =$$




$$\underline{\quad} \times \underline{\quad} =$$




$$\underline{\quad} \times \underline{\quad} =$$



$$\underline{\quad} \times \underline{\quad} =$$



$$\underline{\quad} \times \underline{\quad} =$$



$$\underline{\quad} \times \underline{\quad} =$$