


## Repeated addition for equal groups


For each model, write equal group as repeated addition.




$$7 + 7 =$$



$$\_ + \_ + \_ + \_ + \_ + \_ + \_ =$$



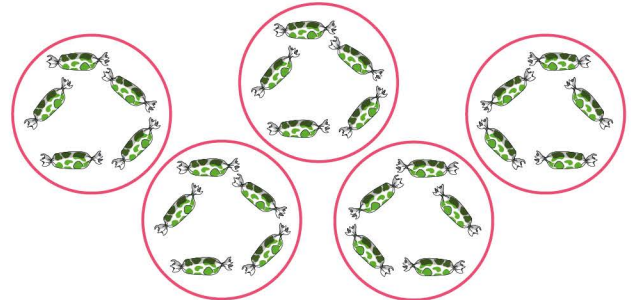
$$\_ + \_ + \_ + \_ =$$




$$\_ + \_ + \_ + \_ + \_ + \_ + \_ =$$




$$\_ + \_ + \_ + \_ + \_ + \_ + \_ + \_ =$$



$$\_ + \_ + \_ + \_ =$$



$$\_ + \_ + \_ + \_ + \_ + \_ + \_ + \_ =$$



$$\_ + \_ + \_ + \_ + \_ + \_ + \_ + \_ + \_ =$$