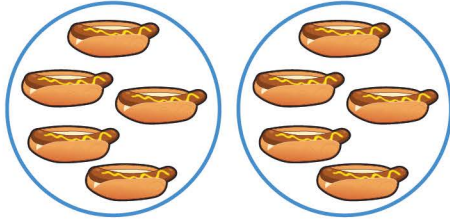
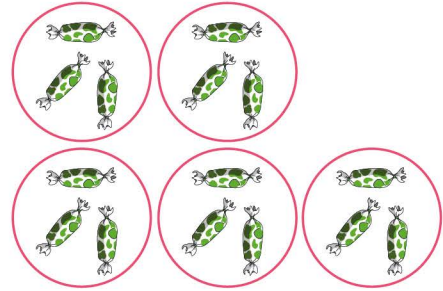


Equal groups - Multiplication sentences


Which multiplication expression describes the model?




3×4 2×5 2×4




5×3 6×4 6×3



3×5 4×4 3×4



5×7 4×5 4×4



5×5 4×1 5×1



6×6 5×6 5×5



1×5 1×4 1×6



3×3 4×3 3×5