



## Arrays - Identify multiplication sentences


Which multiplication expression describes the model?




$10 \times 5$      
  $12 \times 4$      
  $9 \times 12$



$5 \times 7$      
  $4 \times 5$      
  $3 \times 2$



$8 \times 7$      
  $6 \times 9$      
  $7 \times 5$



$4 \times 4$      
  $7 \times 3$      
  $5 \times 7$